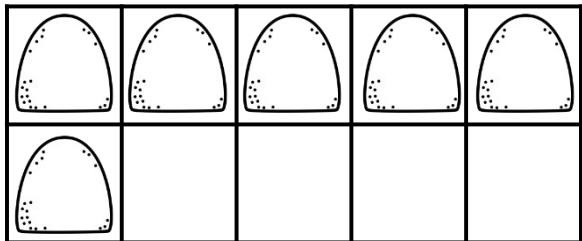
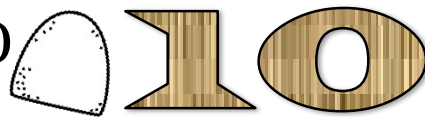
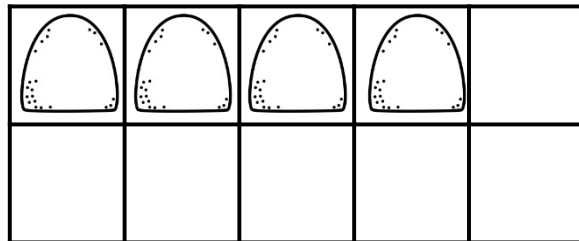


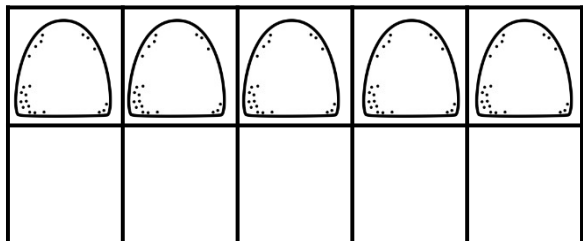
AGGIUNGI GLI ELEMENTI CHE MANCANO
PER FORMARE IL NUMERO



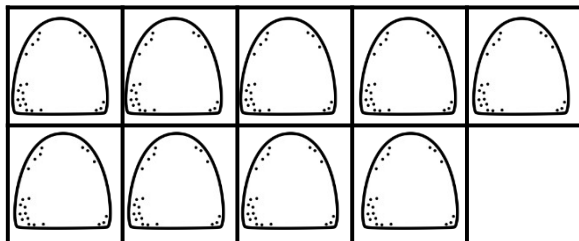
$$\underline{6} + \underline{\quad} = \underline{\quad}$$



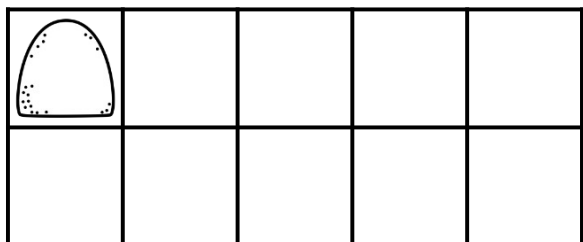
$$\underline{4} + \underline{\quad} = \underline{\quad}$$



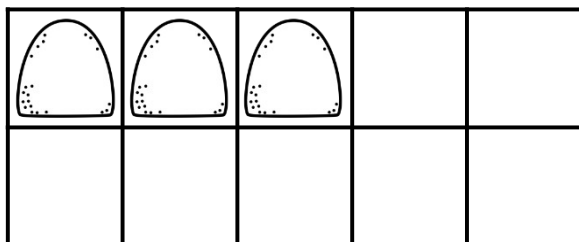
$$\underline{5} + \underline{\quad} = \underline{\quad}$$



$$\underline{9} + \underline{\quad} = \underline{\quad}$$



$$\underline{1} + \underline{\quad} = \underline{\quad}$$



$$\underline{3} + \underline{\quad} = \underline{\quad}$$