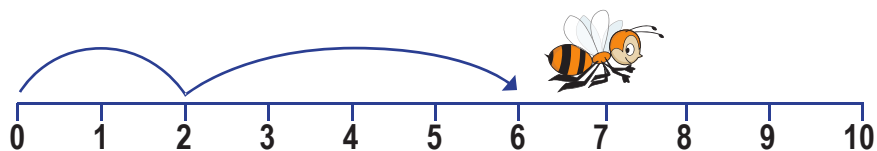
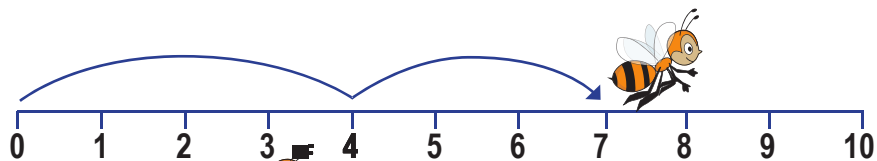


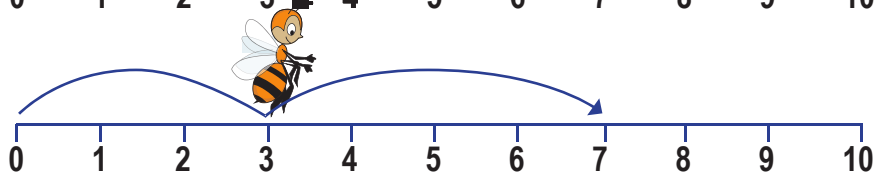
ADDIZIONI SULLA LINEA DEI NUMERI




$$\square + \square = \square$$



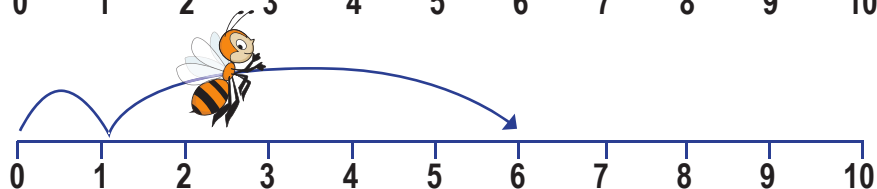
$$\square + \square = \square$$



$$\square + \square = \square$$



$$\square + \square = \square$$



$$\square + \square = \square$$

$5+3=8$



$2+8=10$



$6+3=9$



$4+1=5$



$7+2=9$

