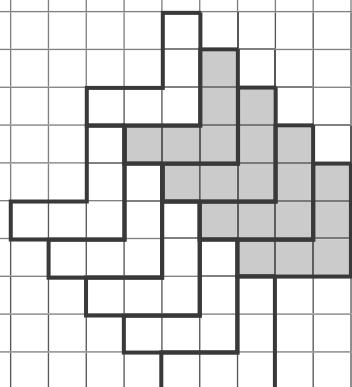
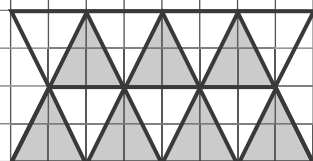


# LE FRAZIONI

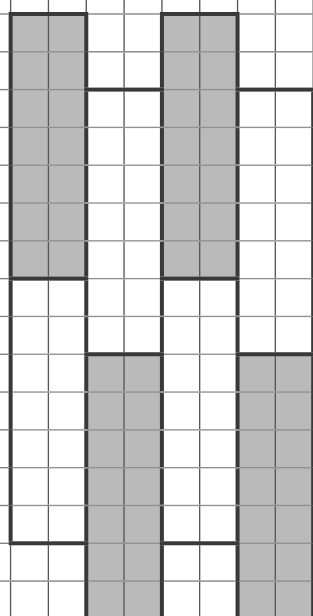
Correggi le figure e ridisegna a lato in modo che rappresentino le frazioni indicate.



$$\frac{4}{11}$$



$$\frac{7}{12}$$



$$\frac{3}{9}$$