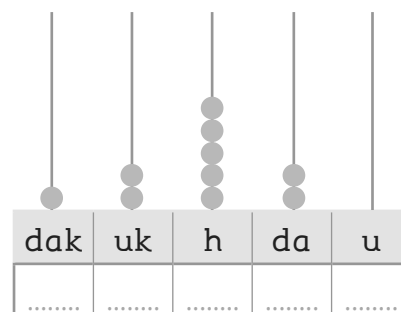
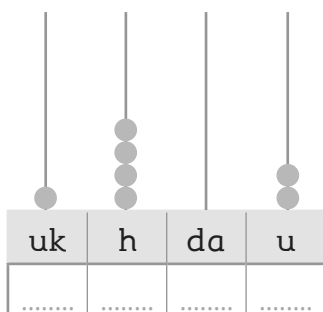
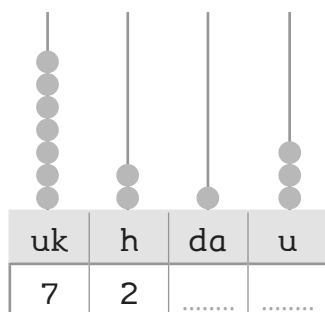
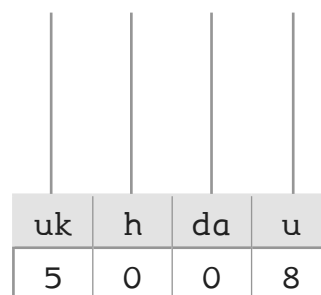
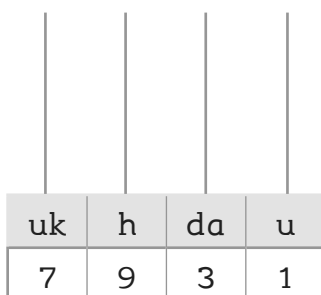
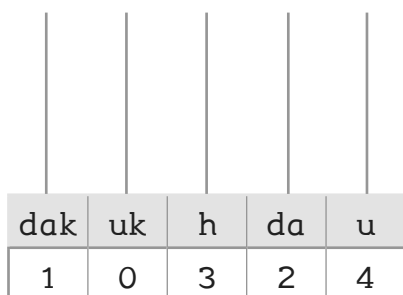


# IL SISTEMA DI NUMERAZIONE

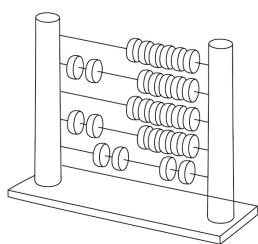
1. SCOMPONI IL NUMERO RAPPRESENTATO CON L'ABACO. SEGUI L'ESEMPIO.



2. RAPPRESENTA I NUMERI CON L'ABACO.



3. LEGGI CON ATTENZIONE I NUMERI SCOMPOSTI IN TABELLA. SCRIVI LO ZERO SE OCCORRE E RICOMPONI IL NUMERO.



hk	dak	uk	h	da	u	
	4	8	0	7	1	48 071
		7	3		3	.....
6	7	4				.....
	3		5	9	2	.....
		9	2	3	8	.....
	6	8	4	1		.....
1		5	2	4	6	.....

4. METTI IN CORRISPONDENZA LO STESSO NUMERO ESPRESSO IN LETTERE E CIFRE.

1 500

11 320

7 300

12 700

9 000

25 010

millecinquecento

settemilatrecento

dodicimilasettecento

venticinquemiladieci

undicimilatrecentoventi

novemila